

CANDIDATE
NAME

CENTRE
NUMBER

--	--	--	--	--

CANDIDATE
NUMBER

--	--	--	--



BIOLOGY

Paper 2 Core

0610/21

May/June 2015

1 hour 15 minutes

Candidates answer on the Question Paper.

No Additional Materials are required.

READ THESE INSTRUCTIONS FIRST

Write your Centre number, candidate number and name on all the work you hand in.

Write in dark blue or black pen.

You may use an HB pencil for any diagrams or graphs.

Do not use staples, paper clips, glue or correction fluid.

DO NOT WRITE IN ANY BARCODES.

Answer **all** questions.

Electronic calculators may be used.

You may lose marks if you do not show your working or if you do not use appropriate units.

At the end of the examination, fasten all your work securely together.

The number of marks is given in brackets [] at the end of each question or part question.

The syllabus is approved for use in England, Wales and Northern Ireland as a Cambridge International Level 1/Level 2 Certificate.

This document consists of **18** printed pages and **2** blank pages.

- 1 Flowering plants can be divided into two groups: monocotyledons and eudicotyledons (dicotyledons).

Complete Table 1.1 to state the differences between these two types of flowering plants. An example has been done for you.

Table 1.1

difference	monocotyledons	eudicotyledons (dicotyledons)
number of cotyledons in the seed	1	2
pattern of leaf veins		
number of petals present		

[4]

[Total: 4]

2 (a) (i) Sometimes teeth develop dental decay.

Describe how dental decay develops.

.....

.....

.....

.....

.....

.....

.....

.....

.....

..... [4]

(ii) Table 2.1 states three methods of caring for the teeth to prevent dental decay.

Complete Table 2.1 by describing why each method is effective.

Table 2.1

method of caring for the teeth	description of why the method is effective
brushing	
rinsing the mouth after eating	
not eating sweet foods between meals	

[3]

(b) (i) There are four types of teeth.

State the functions of each of the following when food is being eaten.

incisors

.....

canines

.....

premolars and molars

.....

[3]

(ii) Suggest how the tongue helps in the process of chewing.

.....

.....

..... [1]

(c) Describe **two** reasons why solid food is chewed before it is swallowed.

1

.....

2

.....

[2]

[Total: 13]

3 Fig. 3.1 shows the human respiratory system.

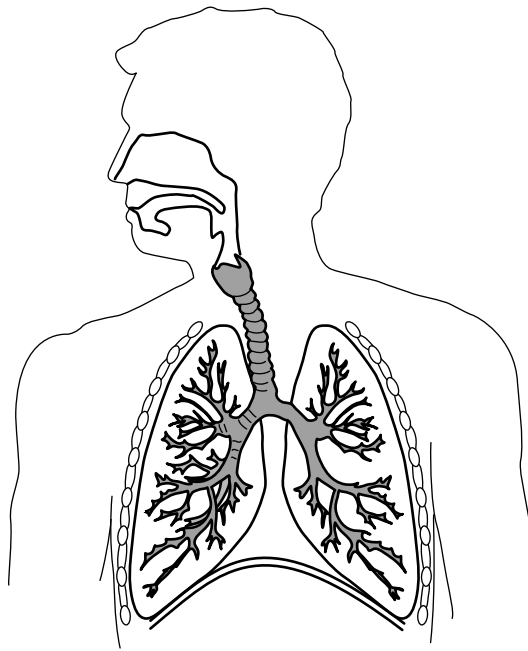


Fig. 3.1

(a) On Fig. 3.1 use label lines to identify:

a bronchiole;

the larynx;

the trachea.

[3]

(b) Fig. 3.2 shows:

a group of alveoli and the capillaries surrounding them in a human lung;
 a section through this group of alveoli with most of the capillaries removed;
 a magnified section of part of the wall of an alveolus and its capillary.

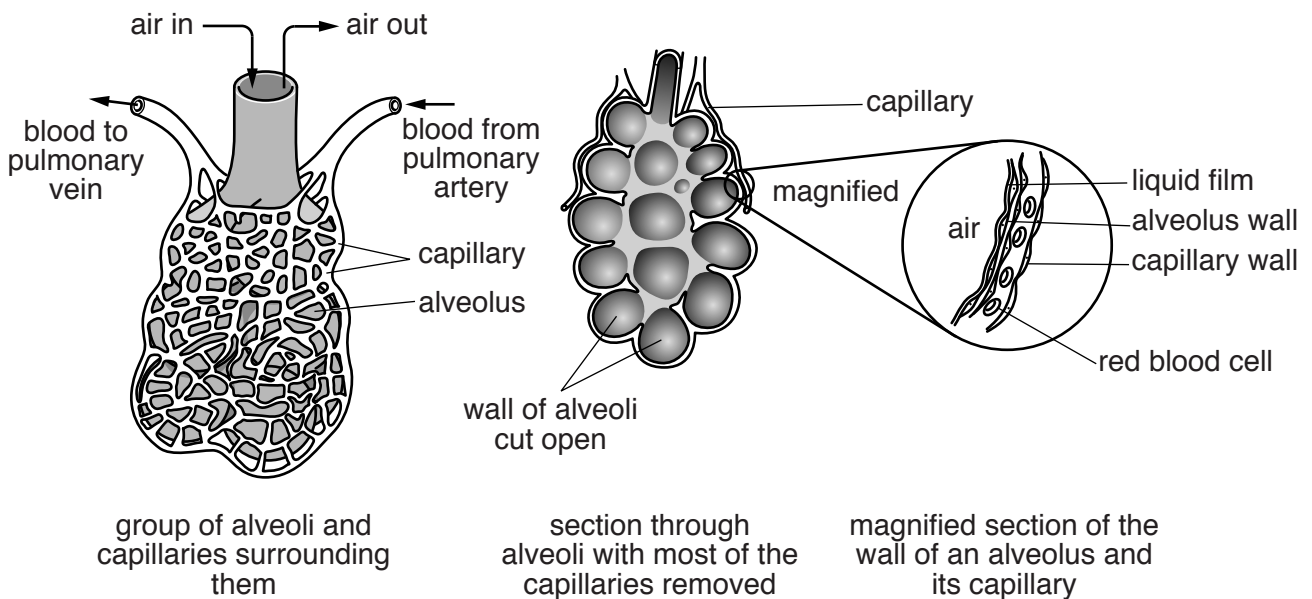


Fig. 3.2

Use Fig. 3.2 to describe **three** features of gas exchange surfaces in animals.

feature 1

.....

feature 2

.....

feature 3

.....

[3]

(c) In an investigation a student recorded the volume of air inspired in one minute. The measurement was taken while the student was resting and again when the student had run an 800m race.

The results are shown in Table 3.1.

Table 3.1

	volume of air inspired /dm ³ per min
before the race	5.80
at the end of the race	88.75

(i) Calculate the increase in the volume of air inspired by the student at the end of the race.
dm³ per min [1]

(ii) State **two** changes that the body makes to increase the volume of air inspired.

1

.....

2

.....

[2]

(iii) Suggest **one** reason why the body needs more air during exercise.

.....

.....

..... [1]

[Total: 10]

4 (a) Describe how deforestation harms the environment.

.....

.....

.....

.....

.....

.....

.....

.....

.....

.....

..... [4]

(b) Humans are polluting the environment.

Complete Table 4.1 by naming **two** examples of pollutants in each part of the environment. You should name different pollutants for each part of the environment.

Table 4.1

part of the environment	pollutant
air	1
	2
land	1
	2
water	1
	2

[3]

[Total: 7]

5 (a) Define the following genetic terms.

mutation

.....

.....

heterozygous

.....

.....

recessive allele

.....

.....

[6]

(b) People use sun-cream to protect their skin. Ultra-violet light from the sun is a type of ionising radiation.

Fig. 5.1 shows sun-cream being applied.



Fig. 5.1

Suggest how using sun-cream reduces the damaging effect of the Sun's rays.

.....

.....

.....

[1]

- (c) Fig. 5.2 shows the hand of a person who suffers from a mutation that results in people having more than five digits on each hand (polydactyly).



Fig. 5.2

The mutation that results in this condition is **dominant**.

Fig. 5.3 shows how the condition is inherited in a family.

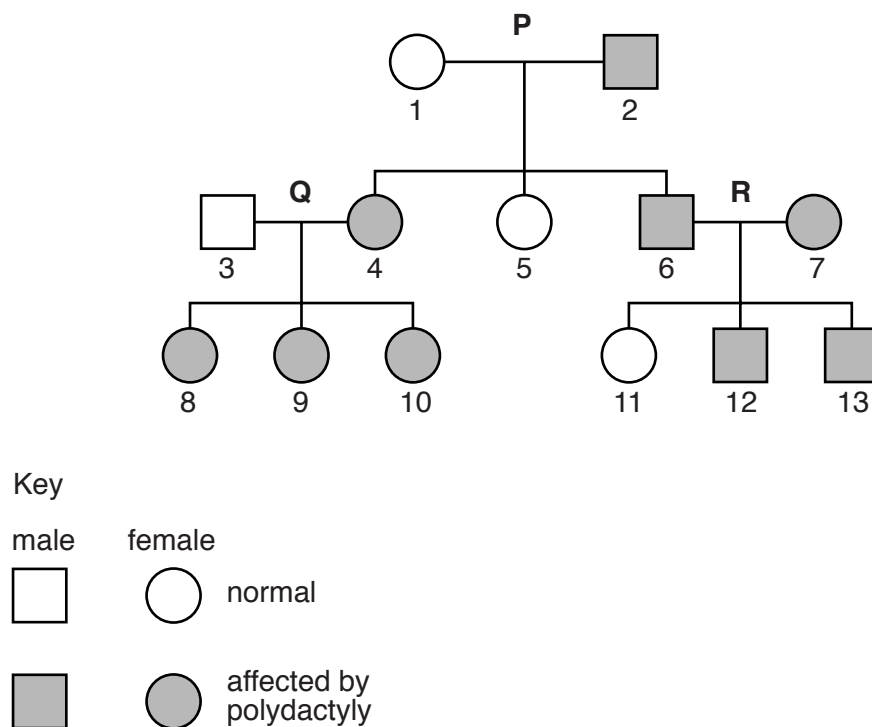


Fig. 5.3

(i) State the genotype of the individuals shown in Fig. 5.3.

Use **AA**, **Aa** or **aa**.

Write your answers in Table 5.1.

Table 5.1

numbered person on Fig. 5.3	genotype of person
1	
2	
3	
9	

[4]

(ii) Using evidence from Fig. 5.3, state which of the couples, **P**, **Q** or **R**, provides proof that the mutation is **not** recessive.

couple [1]

(iii) Explain the reason for your answer.

.....

.....

.....

..... [2]

[Total: 14]

6 Fig. 6.1 shows a section through a seed.

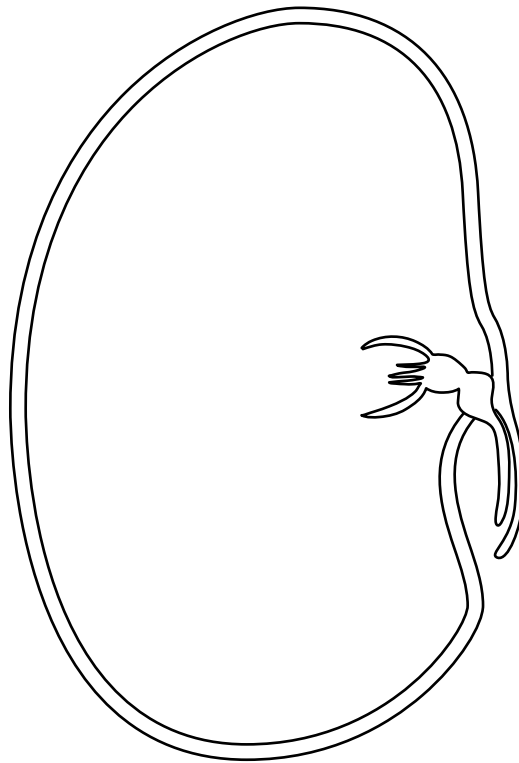


Fig. 6.1

(a) Using label lines, identify the following structures on Fig. 6.1:

the plumule;

the radicle;

the testa.

[3]

(b) Name the structure in the seed that contains a store of food.

..... [1]

(c) State the importance of seed dispersal to a plant.

.....
..... [1]

[Total: 5]

7 (a) Fig. 7.1 shows the relationships between some organisms in part of an ecosystem.

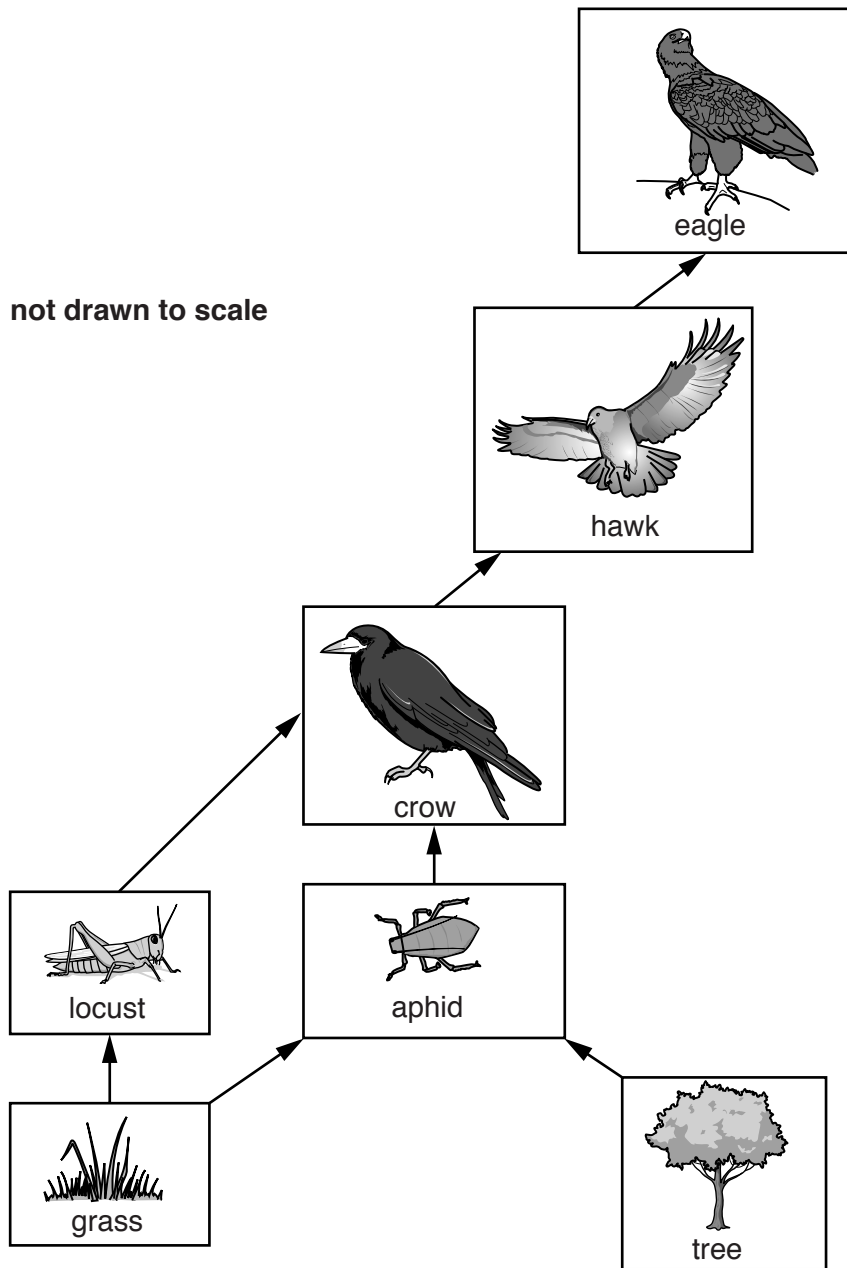


Fig. 7.1

(i) Finches are another organism in this ecosystem. These birds eat the seeds that the tree produces, and the hawks and eagles eat the finches.

Add this information to Fig. 7.1.

[3]

(ii) Suggest and explain **two** changes that might occur if the eagles in this ecosystem died out.

change

.....

explanation

.....

change

.....

explanation

.....

[4]

(b) The boxes on the left contain the names of types of organisms found in a food web.

The boxes on the right contain definitions of these types of organisms.

Draw a line from each box on the left to the box on the right that states its definition.

One example has been done for you.

carnivore	an animal that gets its energy by eating other animals
consumer	the position of an organism in a food chain, food web or pyramid of numbers, biomass or energy
decomposer	an animal that gets its energy from eating plants
herbivore	an organism that gets its energy from feeding on other organisms
producer	an organism that gets its energy from dead or waste organic matter
	an organism that makes its own organic nutrients, usually using energy from sunlight, through photosynthesis

[4]

[Total: 11]
[Turn over

8 (a) The digestive system produces enzymes.

Define the term *enzyme*.

.....

.....

.....

.....

..... [2]

(b) Fig. 8.1 shows how the reaction rates of two different enzymes, **L** and **M**, vary when the pH changes.

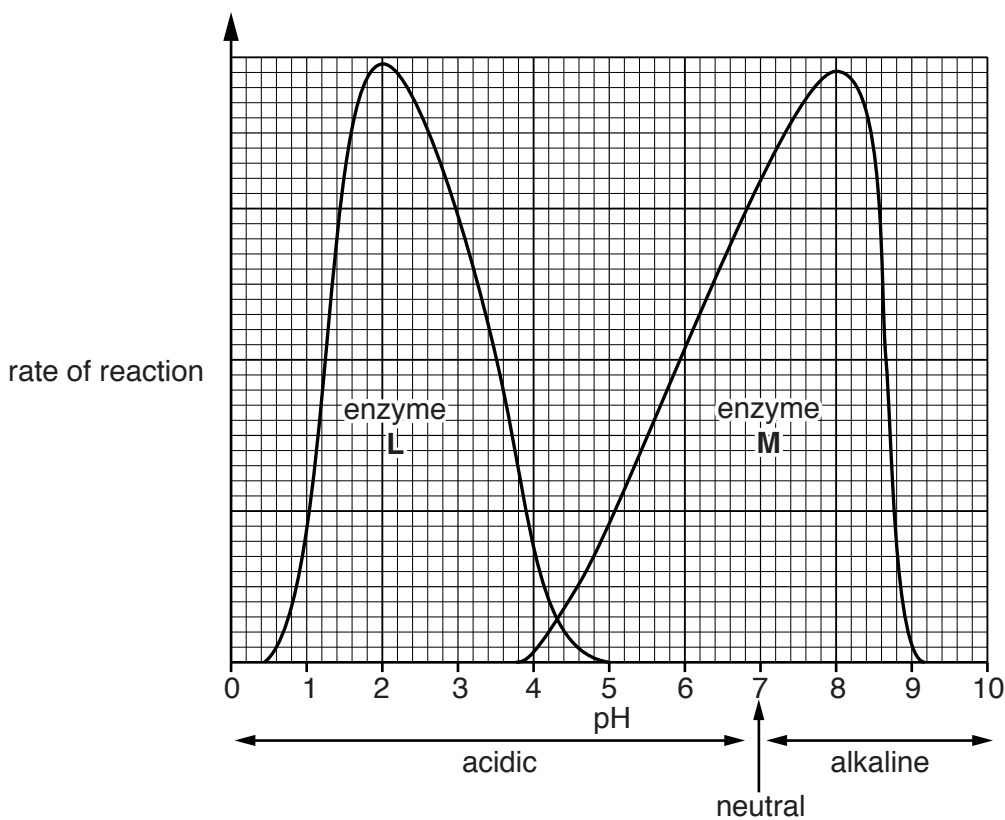


Fig. 8.1

Use Fig. 8.1 to state the pH at which each of these enzymes work the fastest.

pH for enzyme **L**:

pH for enzyme **M**:

[2]

(c) Table 8.1 lists the names of three enzymes found in the alimentary canal.

Complete Table 8.1 by writing in the names of the substrate and **one** end-product for each enzyme.

Choose your answers from the list.

amino acids **cellulose** **fat** **fatty acids**
glucose **glycerol** **maltose** **protein**
starch **vitamins**

Table 8.1

name of enzyme	substrate	one end-product
amylase		
lipase		
protease		

[6]

[Total: 10]

9 (a) Fig. 9.1 shows a green plant.




Fig. 9.1

Plants need to move substances around between their leaves, stems and roots. One of the processes they use is translocation.

Describe the process of translocation.

.....

.....

.....

.....

.....

.....

.....

.....

.....

..... [3]

(b) Fig. 9.2 shows the whole plant and sections through its root, stem and a leaf.

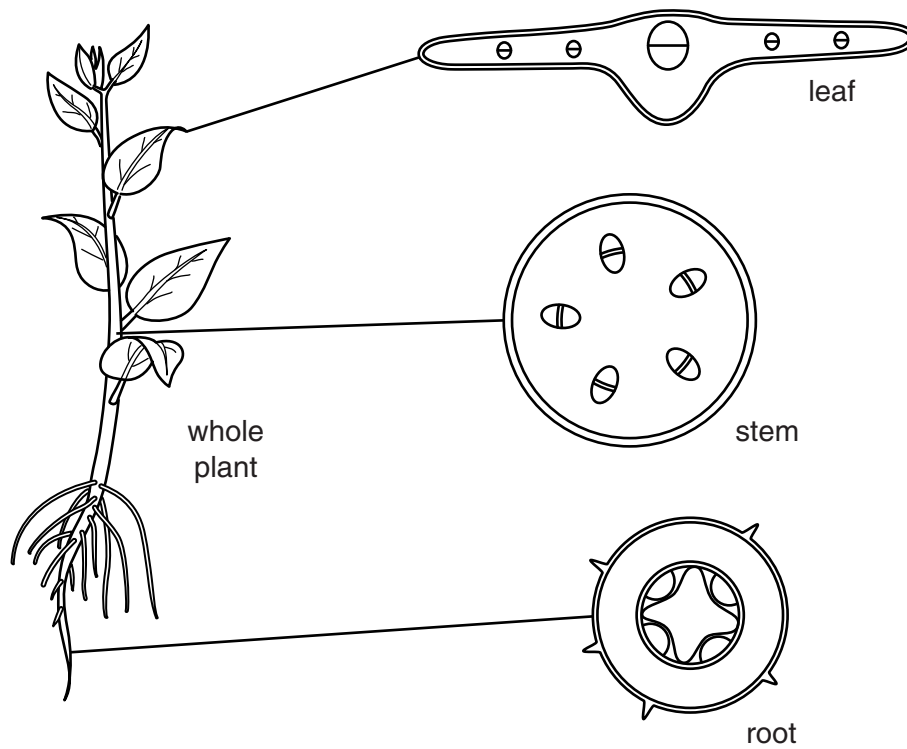


Fig. 9.2

On Fig. 9.2 use label lines and the letter **X** to identify one region of xylem in **each** section (root, stem and leaf). [3]

[Total: 6]

BLANK PAGE

Permission to reproduce items where third-party owned material protected by copyright is included has been sought and cleared where possible. Every reasonable effort has been made by the publisher (UCLES) to trace copyright holders, but if any items requiring clearance have unwittingly been included, the publisher will be pleased to make amends at the earliest possible opportunity.

To avoid the issue of disclosure of answer-related information to candidates, all copyright acknowledgements are reproduced online in the Cambridge International Examinations Copyright Acknowledgements Booklet. This is produced for each series of examinations and is freely available to download at www.cie.org.uk after the live examination series.

Cambridge International Examinations is part of the Cambridge Assessment Group. Cambridge Assessment is the brand name of University of Cambridge Local Examinations Syndicate (UCLES), which is itself a department of the University of Cambridge.